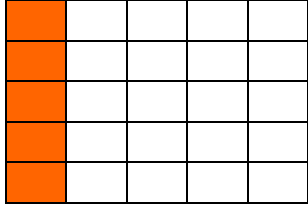




BREUKEN 1

Naam: _____ Klasnr.:

Welke deel is gekleurd? Omkring het juiste antwoord! Succes!

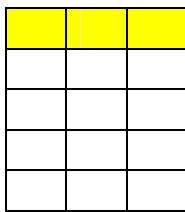


1/5

5/5

2/10

1/25




1/3

1/5

3/5

1/15

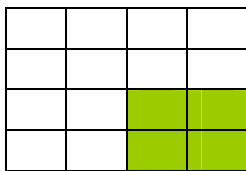


1/5

1/2

2/5

5/5

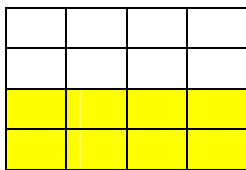


4/8

1/4

1/5

1/6



1/2

1/3

1/4

1/5